

Name _____



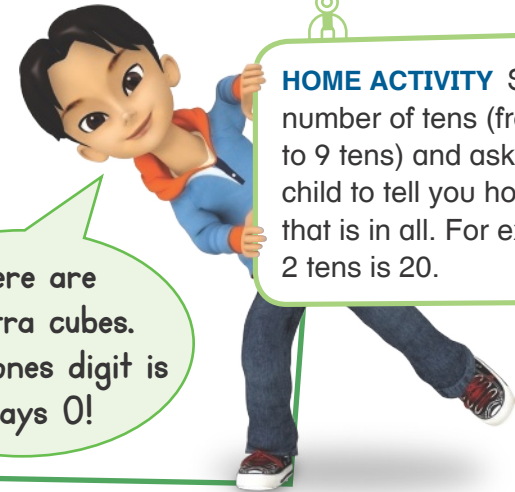
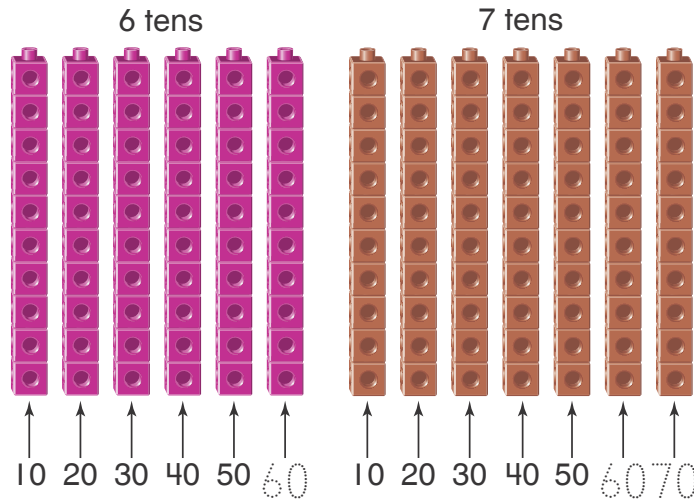
Homework & Practice 8-2

Numbers Made with Tens

Another Look! You can count to quickly add tens.



The tens digit tells how many groups of 10 there are!




HOME ACTIVITY Say a number of tens (from 1 ten to 9 tens) and ask your child to tell you how many that is in all. For example, 2 tens is 20.


There are no extra cubes. So the ones digit is always 0!



Count to find how many tens.



_____ , _____ , _____ , _____ , _____ , _____ , _____ , _____
_____ tens and _____ ones



_____ , _____ , _____ , _____ , _____ , _____ , _____ , _____
_____ tens and _____ ones

Draw the cubes for the counting shown. Then write the total.

3. 


10, 20, 30, 40, 50, 60, 70

_____ tens

4. 

10, 20, 30


_____ tens

5. 

10, 20, 30, 40, 50, 60

_____ tens

6. **Higher Order Thinking** May has 5 bags. Each bag has 10 marbles in it. There are no marbles outside the bags. How many marbles does May have in all? Draw a picture to solve.



May has _____ marbles.

7. **Assessment** Jerry buys a notebook that has 90 pages. Which of the following can represent 90 pages?

- (A) 6 tens and 0 ones
- (B) 7 tens and 0 ones
- (C) 8 tens and 0 ones
- (D) 9 tens and 0 ones