

Name _____


Practice

1-1

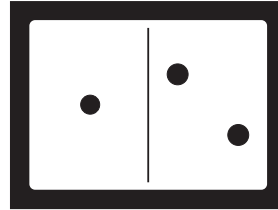
Spatial Patterns for Numbers to 10

Write the number that tells how many.


1.



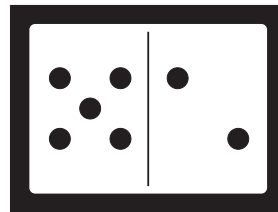
2.




3.




4.



5.



6.



Number Sense

7. Tom has 7 dots.
Can he put the same
number of dots on
each flag?

Yes **No**

