

Name _____

Practice

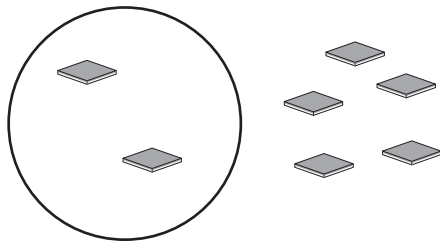
1-2

Making 6 and 7

Write the number inside and outside.

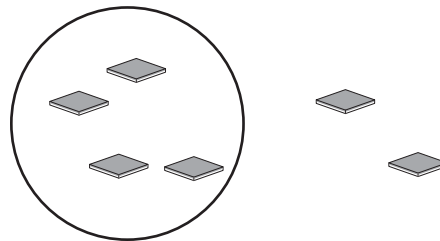
Then write the number in all.

1.



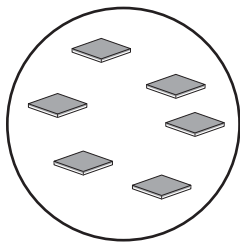
inside outside in all

2.



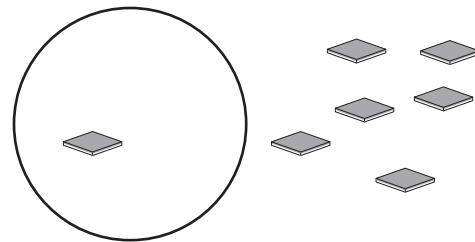
inside outside in all

3.



inside outside in all

4.



inside outside in all

5. Draw 5 tiles inside the circle and 1 tile outside.

Then write how many in all.

