

Name _____

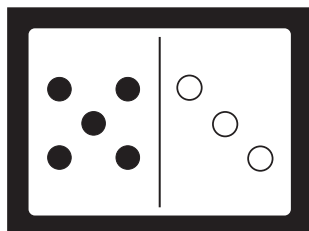
Practice

1-5

Introducing Addition Expressions and Number Sentences

Use the picture. Write the parts. Then write an addition sentence.

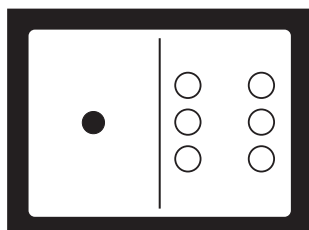
1.



$$\underline{\quad\quad} + \underline{\quad\quad}$$

$$\underline{\quad\quad} + \underline{\quad\quad} = \underline{\quad\quad}$$

2.




$$\underline{\quad\quad} + \underline{\quad\quad}$$

$$\underline{\quad\quad} + \underline{\quad\quad} = \underline{\quad\quad}$$

Visual Thinking

3. Which addition sentence goes with the question?

Fill in the correct bubble.



There are 4 brown rabbits in the garden.

There are 5 white rabbits.

How many rabbits are there in all?

(A) $4 + 5 = 9$

(B) $2 + 7 = 9$

(C) $4 + 4 = 8$

(D) $4 + 1 = 5$