

Name _____


Practice

1-8

Problem Solving: Use Objects

Use counters to solve.

1. Lisa puts 8 sweaters into two drawers.
What are two different ways she can do this?





2. Jack puts 7 plates on two tables.
What are two different ways he can do this?




Number Sense


3. Lynn is planting 9 flowers
in two boxes.
She plants 6 in the first box.
Which shows how many she
plants in the second box?




(A)



(B)



(C)



(D)