

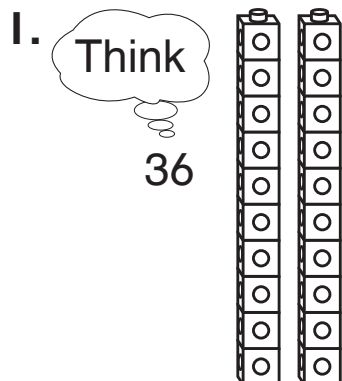
Name _____

Practice

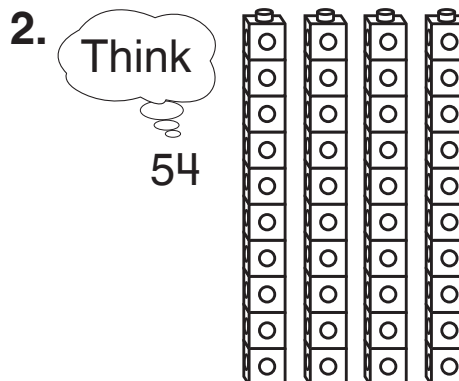
10-3

Adding Tens to Two-Digit Numbers


Write each number sentence.



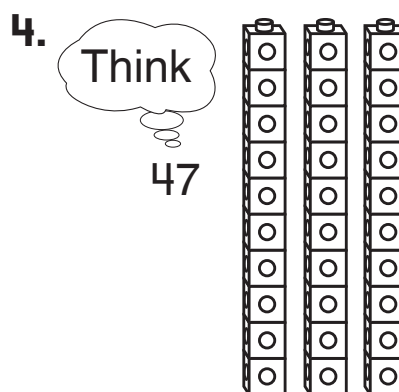
$$\underline{\quad\quad} + \underline{\quad\quad} = \underline{\quad\quad}$$



$$\underline{\quad\quad} + \underline{\quad\quad} = \underline{\quad\quad}$$



$$\underline{\quad\quad} + \underline{\quad\quad} = \underline{\quad\quad}$$



$$\underline{\quad\quad} + \underline{\quad\quad} = \underline{\quad\quad}$$

Number Sense

5. Will has 24 crayons.

He gets 4 more boxes of crayons.

Each box has 10 crayons.

How many crayons does Will have now?

64

(A)

54

(B)

44

(C)

34

(D)