

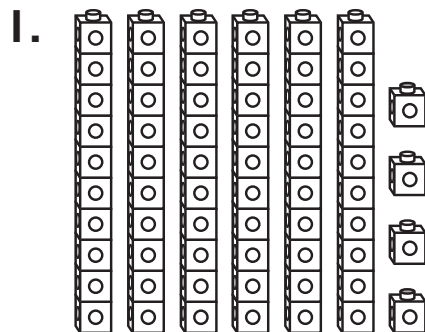
Name \_\_\_\_\_

Practice

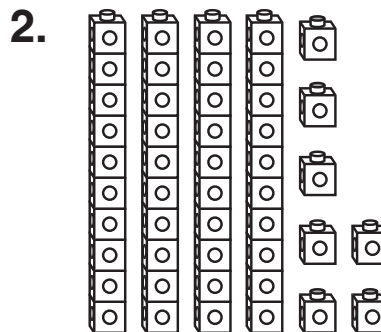
**11-3**

# Subtracting Tens from Two-Digit Numbers

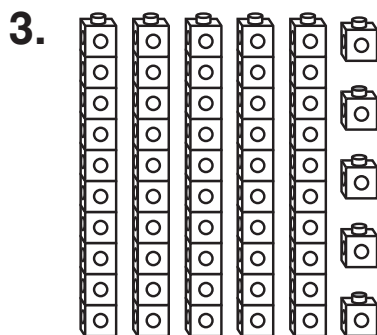
Cross out the tens. Write the difference.



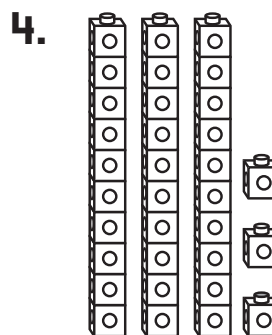
$$64 - 20 = \underline{\quad}$$



$$47 - 30 = \underline{\quad}$$



$$55 - 40 = \underline{\quad}$$



$$33 - 10 = \underline{\quad}$$

## Journal

5. Roberto says that  $75 - 30 = 35$ .

Is Roberto correct?

Explain.

---

---