

Name \_\_\_\_\_

Practice

**12-2**




## Indirect Measurement

Circle the black or white object that is shorter.  
Use the gray object to help.



4. Which ribbon answers the riddle?

I am longer than the spotted ribbon.  
I am shorter than the gray ribbon.

- (A) 
- (B) 
- (C) 
- (D) 