

Name \_\_\_\_\_

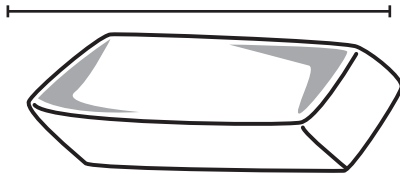
# Using Units to Estimate and Measure Length

Estimate the length. Then use cubes to measure.

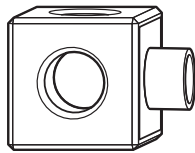
Estimate

Measure

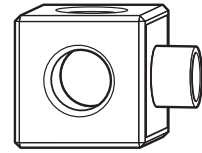
1.



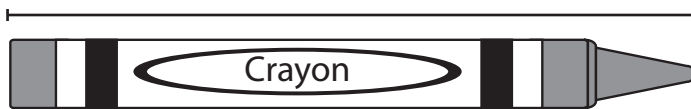
about \_\_\_\_\_



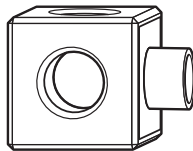
about \_\_\_\_\_




2.



about \_\_\_\_\_



about \_\_\_\_\_



## Reasoning

3. Which is the best estimate for the length of the stapler?

- (A) 6
- (B) 7
- (C) 14
- (D) 17

