











Name \_\_\_\_\_

Practice

**12-5**

## Problem Solving: Use Reasoning

Circle your estimate. Measure to check.

| Estimate  | Measure  |
|---|--|
| 1. fewer  fewer <br> | about _____ <br>about _____  |
| 2. more  more <br>   | about _____ <br>about _____  |

## Reasonableness

Circle your answer.


3. Eric has a paintbrush that is about 12 cubes long.




How many paper clips long could it be?

2     7     12 

## Spatial Thinking

4. Which object would you need the fewest of to measure how long the eraser is?



- (A) 
- (B) 
- (C) 
- (D) 