

Name _____

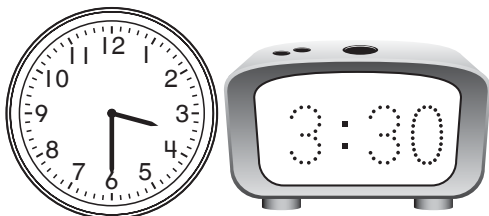
Practice

13-3


Telling and Writing Time to the Half Hour

Write the time shown on each clock.

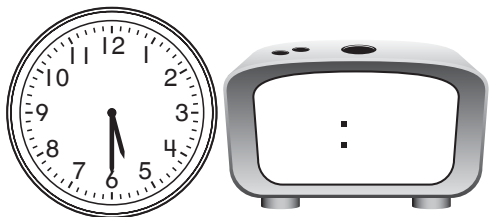
1.




2.



3.



4.



Journal

5. Show 3:00 on the first clock.

On the second clock, show the time 30 minutes later.

Is the hour hand still on 3?

Explain.

