

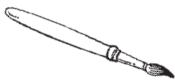




Name _____

Practice

13-4

Problem Solving: Use Data from a Table

Use the schedule to answer the questions.

Time	Activity	
9:00		Art
9:30		T-Ball
10:00		Music
10:30		Puppet Theater
11:00		Swimming

1. Which activity is at 9:00?

2. Which activity is just
before Music?

3. Which activity is just after
Puppet Theater?

Reasoning

4. What time does Music begin?

9:00

(A)

9:30

(B)

10:00

(C)

10:30

(D)