























Name _____

Practice

14-2

Using Data from Picture Graphs

Use the graph to answer the questions.

Favorite Seasons						
 Summer						
 Fall						
 Winter						
 Spring						

- How many children chose winter? _____
- How many fewer children chose Winter than Spring? _____
- Which season did 4 children choose? _____

Number Sense

- How many more children chose summer than spring?

- (A) 11
- (B) 6
- (C) 5
- (D) 1

Reasoning

- How many children voted in all?

- (A) 6
- (B) 14
- (C) 18
- (D) 20