




Name \_\_\_\_\_




Practice

**14-6**

# Making Picture Graphs

Favorite Items to Collect	Tally Marks	Totals
 Shells		3
 Stamps	<del>    </del>	6
 Coins		4

- Use the information in the tally chart.  
Draw pictures to make a picture graph.

Favorite Items to Collect						
 Shells						
 Stamps						
 Coins						

- Which item is the least favorite to collect? \_\_\_\_\_
- Write the items in order from most favored to least favored.

\_\_\_\_\_ most favored

\_\_\_\_\_ least favored

## Number Sense

- How many more people chose stamps than coins?

10

Ⓐ

6

Ⓑ

4

Ⓒ

2

Ⓓ