

Name _____


Practice


15-4


Building with Shapes


Use pattern blocks to make a picture.
Write how many of each shape you used.


1.

_____ 

_____ 

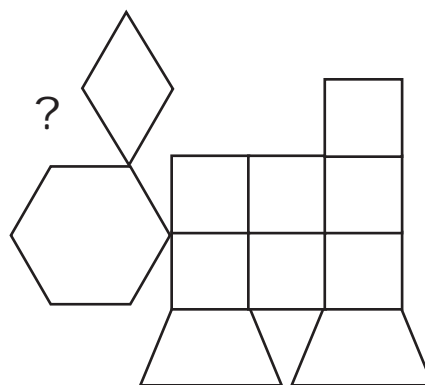
_____ 

_____ 

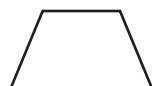
_____ 

Spatial Thinking

2. José is making a picture of a bunny.
He is missing one block.
Which block is missing?



(A)



(B)



(C)



(D)