

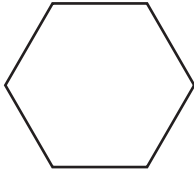



Name _____



Practice

15-5

Making New Shapes from Shapes

Use pattern blocks to make each shape.
Draw the blocks you used.

Make This Shape	Use This Shape	Draw the Shapes
1. 		
2. 		

3. Mark the number that tells how many  you need to make a .

4

Ⓐ

5

Ⓑ

6

Ⓒ

7

Ⓓ

4. **Writing in Math** Use pattern blocks to make a new shape.
Trace the blocks you used below.