

Name _____

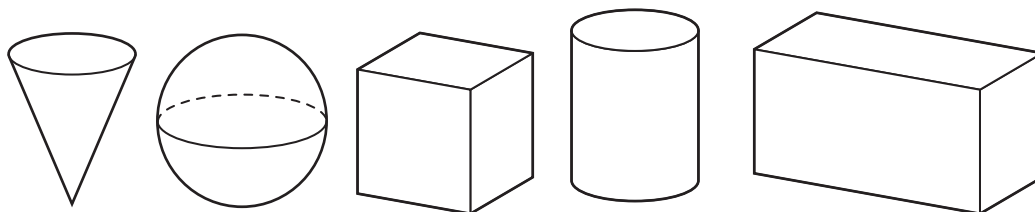
Practice

15-7

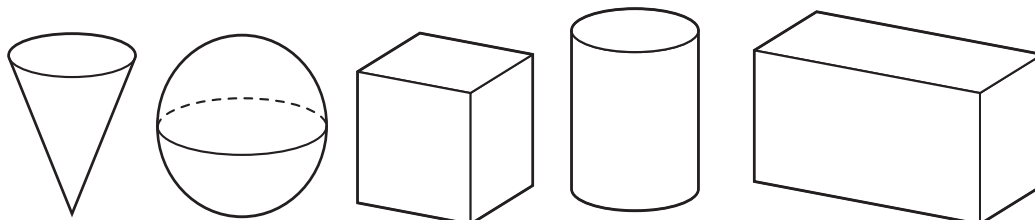
Flat Surfaces and Vertices

Circle the solid figure that answers each question.

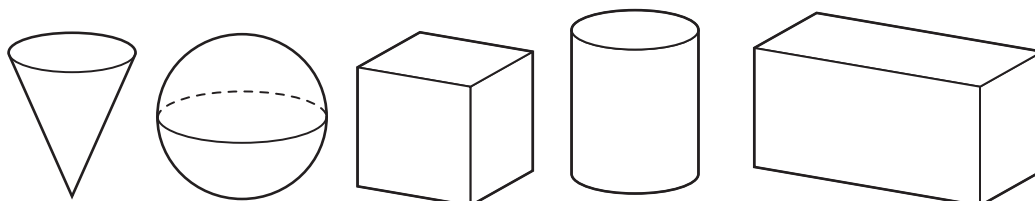
1. Which solid figure has 2 flat surfaces and 0 vertices?



2. Which solid figure has 0 flat surfaces and 0 vertices?



3. Which solid figures have 6 flat surfaces and 8 vertices?

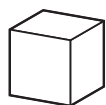


Reasoning

4. Mark the solid figure that answers the question.

I have 1 flat surface. I have 1 vertex.

Which solid figure am I?



(A)



(B)



(C)



(D)