

Name \_\_\_\_\_

Practice

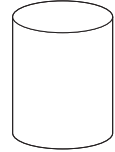
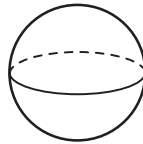
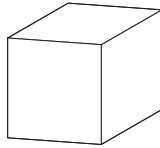
**15-8**

# Sorting Solid Figures

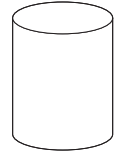
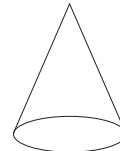
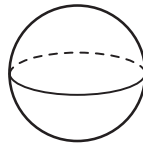
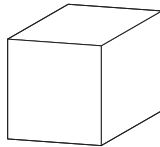
Read the sorting rule.

Circle the solid figures that follow the rule.

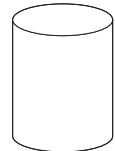
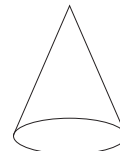
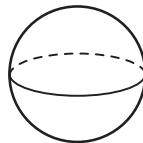
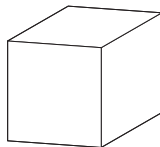
1. 1 flat surface



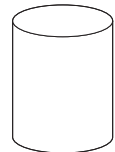
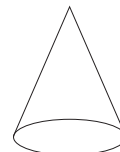
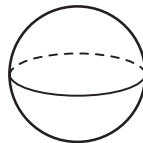
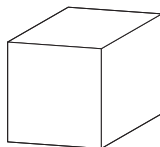
2. 8 vertices



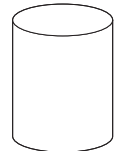
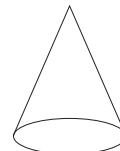
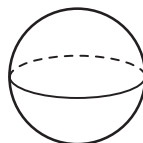
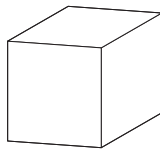
3. 2 flat surfaces



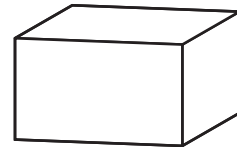
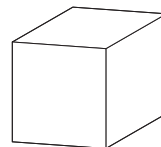
4. 6 flat surfaces



5. 0 vertices



6. Which rule tells how these solid figures are alike?



- Ⓐ 3 vertices
- Ⓑ 4 flat surfaces
- Ⓒ 5 vertices
- Ⓓ 6 flat surfaces