

Name _____

Practice

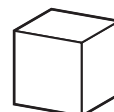
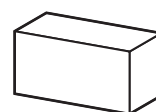
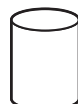
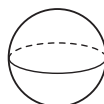
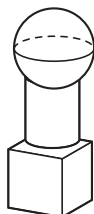
15-9

Building with Solid Figures

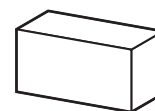
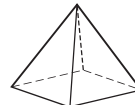
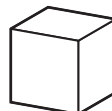
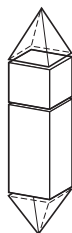
Look at the object.

Write how many of each solid figure is used to make the object.

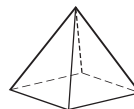
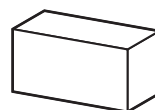
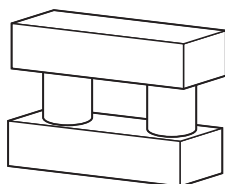
1.



2.



3.



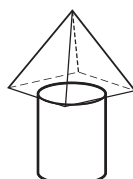
Spatial Thinking

4. Kim used these 2 solid figures to make an object.

Which object did Kim make?



(A)



(B)



(C)



(D)