

Name _____

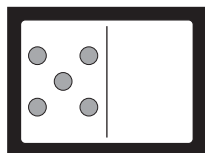
Practice

3-4

Finding Missing Parts of 10

Draw the missing part. Write the numbers.

1.



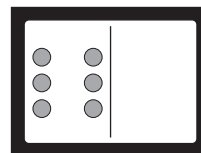
5

part I know

5

missing part

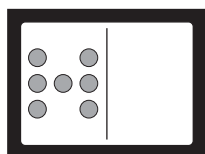
2.



part I know

missing part

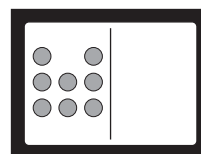
3.



part I know

missing part

4.



part I know

missing part

Algebra

Write the missing part.

5. $4 + \underline{\quad} = 10$

6. $1 + \underline{\quad} = 10$

Journal

Draw a picture to solve the problem.

7. There are 10 cars.

Some cars are inside the garage.

Draw some cars outside the garage.

Write the parts.

part I know

missing part

