

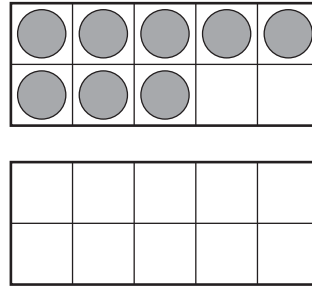
Name _____

Making 10 on a Ten-Frame

Draw counters to solve. Write the missing numbers.

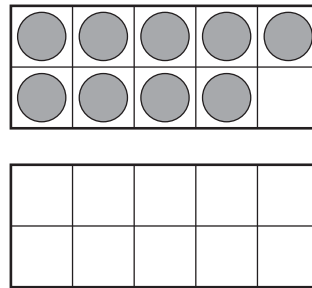
1. 8 10

$$\begin{array}{r} 8 \\ + 3 \\ \hline \square \end{array} \quad \longrightarrow \quad \begin{array}{r} 10 \\ + \square \\ \hline \square \end{array}$$



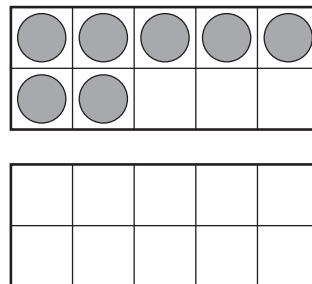
2. 9 10

$$\begin{array}{r} 9 \\ + 3 \\ \hline \square \end{array} \quad \longrightarrow \quad \begin{array}{r} 10 \\ + \square \\ \hline \square \end{array}$$



3. 7 10

$$\begin{array}{r} 7 \\ + 4 \\ \hline \square \end{array} \quad \longrightarrow \quad \begin{array}{r} 10 \\ + \square \\ \hline \square \end{array}$$



Journal

4. Draw a picture of 8 purple flowers and 4 red flowers.

Draw a picture of 10 red squares and 2 purple squares.

Write two addition sentences.

_____ + _____ = _____ _____ + _____ = _____