

Name _____

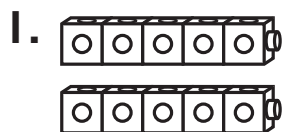
Practice

5-2

Doubles Plus 1

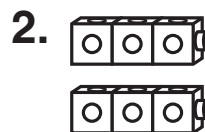
Add the doubles.

Then use the doubles to help you add.



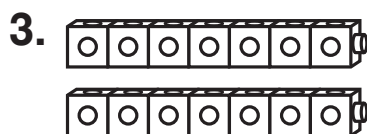
Think 5 + 5 = 10.

So, $5 + 6 =$ _____.



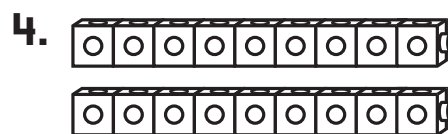
Think _____ + _____ = _____.

So, $3 + 4 =$ _____.



Think _____ + _____ = _____.

So, $7 + 8 =$ _____.



Think _____ + _____ = _____.

So, $9 + 10 =$ _____.

Number Sense

5. Paco has 5 model cars.

He gets 6 more cars for his birthday.

How many cars does he have now?

- (A) 12
- (B) 11
- (C) 10
- (D) 9