

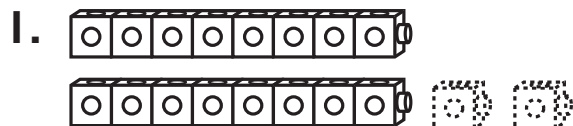
Name _____

Practice

5-3

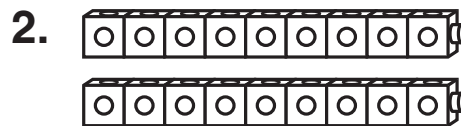
Doubles Plus 2

Draw 2 more cubes. Use a doubles fact to help you add.



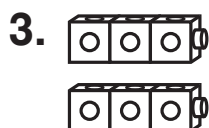
Think 8 + 8 = 16.

So, $8 + 10 =$ _____.



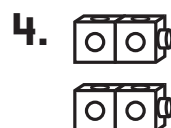
Think _____ + _____ = _____.

So, $9 + 11 =$ _____.



Think _____ + _____ = _____.

So, $3 + 5 =$ _____.



Think _____ + _____ = _____.

So, $2 + 4 =$ _____.

Journal

5. Write a story about the doubles-plus-2 fact $5 + 7 = 12$.
