

Name _____

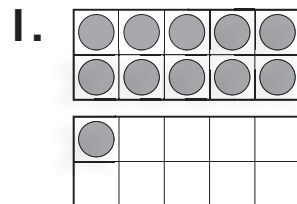
Practice

6-1

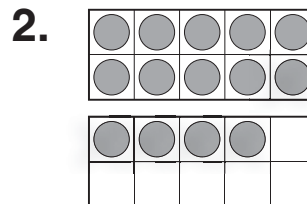
Making 10 to Subtract

Make a 10 to subtract.


Complete the subtraction fact.




$$11 - 8 = \underline{\quad}$$



$$14 - 5 = \underline{\quad}$$



$$15 - 7 = \underline{\quad}$$



$$18 - 9 = \underline{\quad}$$

Reasoning

5. Which subtraction fact does this picture show?

- (A) $17 - 8 = 9$
- (B) $16 - 10 = 6$
- (C) $16 - 9 = 7$
- (D) $16 - 8 = 8$

