

Name \_\_\_\_\_

Practice

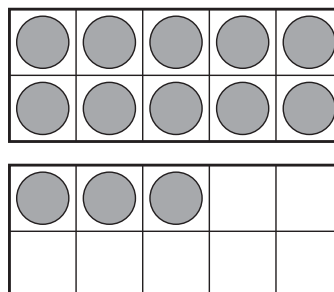
**6-2**

# More with Making 10 to Subtract

Make a 10 to solve.

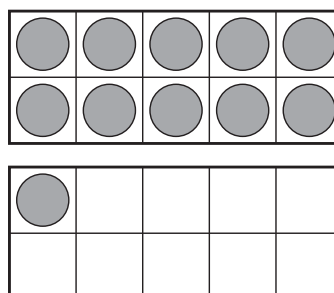
Write a subtraction sentence.

1. Nick has 13 sports cards.  
He loses 4 cards.  
How many sports cards  
does Nick have left?



\_\_\_\_\_ - \_\_\_\_\_ = \_\_\_\_\_

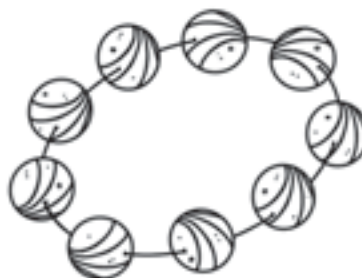
2. Jay picks 11 flowers.  
He gives 8 to his grandmother.  
How many flowers  
does Jay have left?



\_\_\_\_\_ - \_\_\_\_\_ = \_\_\_\_\_

## Algebra

3. Anita has 18 beads.  
She uses 9 beads to  
make a necklace.  
How many beads does  
Anita have left?  
Which subtraction sentence  
tells about the story?



Ⓐ  $19 - 9 = 10$

Ⓒ  $18 - 8 = 10$

Ⓑ  $18 - 10 = 8$

Ⓓ  $18 - 9 = 9$