

Name _____

Using Related Facts

Write an addition fact and
a related subtraction fact.

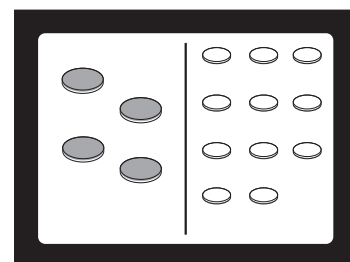
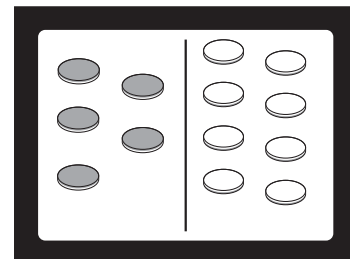
1. $\underline{5} + \underline{8} = \underline{13}$

$\underline{13} - \underline{8} = \underline{5}$

2. $\underline{\quad} + \underline{\quad} = \underline{\quad}$

$\underline{\quad} - \underline{\quad} = \underline{\quad}$

13




Reasoning

Solve the problem.

3. Abby's dad wrote this
addition sentence on
a piece of paper.

Which subtraction sentence
is related?



- (A) $7 + 5 = 12$
- (B) $12 - 7 = 5$
- (C) $12 - 9 = 3$
- (D) $7 - 5 = 2$