

Name _____


Practice

6-5

Using Addition to Subtract


Complete the model.

Then complete the number sentences.



$$18 - 8 = \underline{10}$$

$$8 + \underline{\quad} = 18$$



$$15 - 6 = \underline{\quad}$$

$$6 + \underline{\quad} = 15$$

Algebra

3. Which addition fact will help you solve $14 - 9$?

Ⓐ $5 + 14 = 19$




Ⓑ $5 + 9 = 14$




Ⓒ $4 + 9 = 13$

Ⓓ $5 + 7 = 12$

Algebra

4. Draw the missing shape.
Then explain how you know.

If  +  = 

Then  -  = 

Explain: _____
