

Name _____

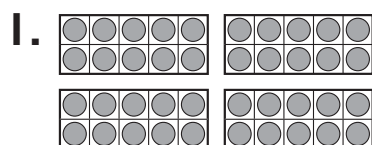
Practice

7-3

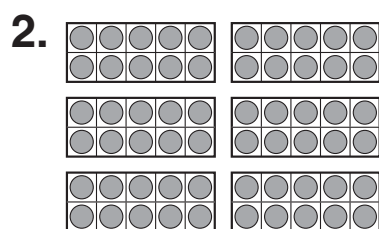
Counting by 10s to 120

10, ten,	20, twenty,	30, thirty,	40, forty,	50, fifty,	60, sixty,
70, seventy,	80, eighty,	90, ninety,	100, one hundred	110, one hundred ten	120, one hundred twenty

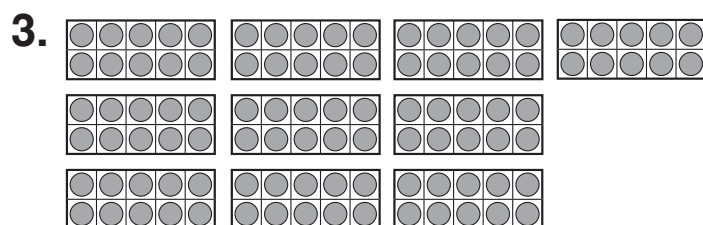
Count by tens. Then write the numbers.



4 tens = 40
forty



_____ tens = _____



_____ tens = _____

Journal

4. Laura wants to show 70 in tens.
How many tens will she draw?
How do you know?
