

Name _____

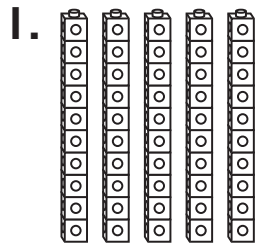
Practice

8-2

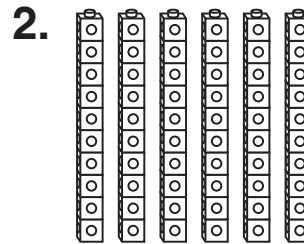
Numbers Made with Tens

Count by 10s.

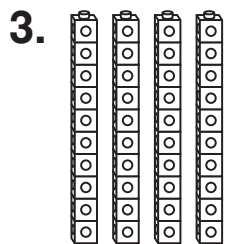
Write the numbers.



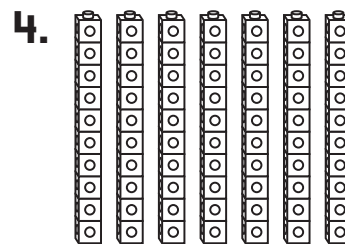
_____ tens is _____.



_____ tens is _____.



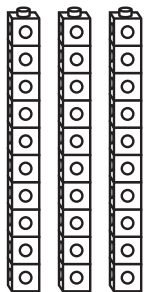
_____ tens is _____.



_____ tens is _____.

Reasonableness

5. What number is shown?



- (A) 3
- (B) 10
- (C) 12
- (D) 30

Algebra

6. Nancy has 50 marbles.
30 of the marbles are in
one bag.
The rest are in another bag.
How many marbles are in
the second bag?

- (A) 40
- (B) 30
- (C) 20
- (D) 10