



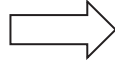
Name _____

Tens and Ones


Count the tens and ones. Then write the numbers.

1.

Tens	Ones
	





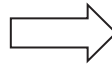
Tens	Ones
4	5




45

2.



Tens	Ones
	



Tens	Ones




3.

Tens	Ones
	





Tens	Ones



Estimation

4. About how many cubes are shown in the picture?

Tens	Ones
	

70
Ⓐ

50
Ⓑ

30
Ⓒ

10
Ⓓ